

NAME- \_\_\_\_\_ FATHER'S NAME- \_\_\_\_\_

ROLL NO.- \_\_\_\_\_ CLASS- 1<sup>ST</sup>

MOBILE NO.- \_\_\_\_\_ INVIGILATOR SIGN. - \_\_\_\_\_

TIME- 90 Min.

MM- 60

## SUBJECT- MATHEMATICS

### A. Multiple Choice Questions:

Q 1. 7 is \_\_\_\_\_ than 5.

a) less

b) more

c) equal


d) can't say

Q 2. Count and match the following


A. 1 ten and 3 ones



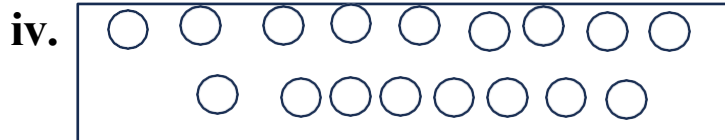
B. 1 ten and 8 ones



C. 1 ten and 1 one



D. 1 ten and 5 ones



a) A- iii, B- iv, C- i, D- ii

b) A- ii, B- i, C- iii, D- iv



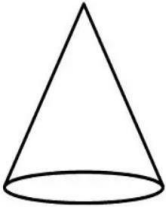
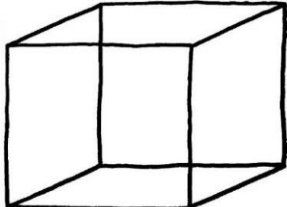
c) A- iv, B- iii, C- ii, D- I

d) A- iii, B- ii, C- i, D- iv


**Q 3. In a farm house, there are 10 cows, 12 goats and 15 horses. Which of the following animals is minimum in number in the farm house?**


- a) Horses
- b) Cows
- c) Goats
- d) Can't say

**Q 4. Which of the following image is similar to a rectangle?**
















- a) 
- b) 
- c) 
- d) 

**Q 5. What will come next in the given pattern?**




- a) 
- b) 
- c) 
- d) 

**Q 6. Choose the geometric figure that will replace the question mark (?)**


|   |   |  |   |
|---|---|--|---|
|  |  |   |  |
|  |  |  |  |
|  |  |   | <b>?</b>  |
|  |  |   |  |




**Q 7. Which of the following pots hold the maximum amount of water?**



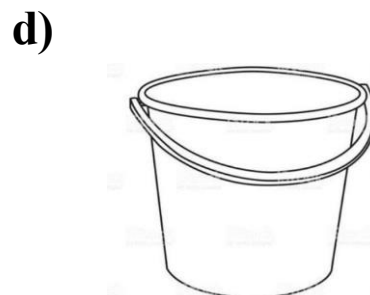
**200 ml**



**100 ml**



**150 ml**



**250 ml**

**Q 8. Which of the following clocks and their given time is incorrectly matched?**

**a)**



**3:00 PM**

**b)**



**8:00 PM**

**c)**



**10:00 PM**

**d)**



**10:00 PM**

**Q 9. 3 tens and 6 ones  3 tens and 8 ones**

**a) <**

**b) >**

**c) =**

**d) None**

**Q 10. The number name for 78 is \_\_\_\_\_**

**a) seven eight**

**b) seven eighty**

**c) seventy eighty**

**d) seventy eight**

**B. Fill in the blanks-**

**Q 11.** The number 20 has \_\_\_\_\_ones.

**Q 12.** \_\_\_\_\_comes before 79.

**Q 13.** \_\_\_\_\_is the second last month of the year.

**Q 14.** A triangle has \_\_\_\_\_sides.

**Q 15.** If we multiply 0 with any digit the answer will be \_\_\_\_\_.

**Q 16.**  $44 + 36$  is equal to \_\_\_\_\_.

**Q 17.**  $96 - 43$  is equal to \_\_\_\_\_.

**Q 18.** Continue the pattern.

34, 36, 38, \_\_\_\_\_, \_\_\_\_\_, \_\_\_\_\_

**Q 19.** 4 groups with  apples in each group is equal to 8.

**Q 20.**  $87 - \text{ } = 30$ .

**C. Each Question Carries one mark**

**Q 21. Arrange in the correct descending order.**

**19, 13, 14, 20, 9 = \_\_\_\_\_**

**Q 22. On Shalu's birthday, her class teacher gave her 3 candies, her friend Bittu gave her 7 candies and Dipsy gave her 8 candies. How many candies does Shalu have in total?**

\_\_\_\_\_

**Q 23. According to their length arrange from Shortest to longest- Ladder, Matchstick, Ruler.**

\_\_\_\_\_

**Q 24. Cost of Vada pav = ₹30**

**Cost of Lassi = ₹20**

**If you give ₹100 to shopkeeper and purchase Vada pav and Lassi. How much will you get back?**


**Amount get back =**

\_\_\_\_\_

**Q 25. Write the name of a shape with 4 sides and all sides are equal in length.**

\_\_\_\_\_


**Q 26.**



Number of  = \_\_\_\_\_

Number of  = \_\_\_\_\_

Number of  = \_\_\_\_\_

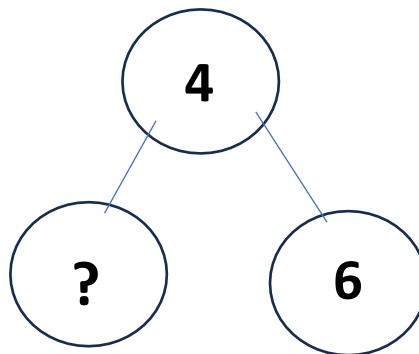



Number of  = \_\_\_\_\_

**Q 27. Ravi wakes up in the morning and looks at the wall clock and write down the time shown in clock.**





\_\_\_\_\_

**Q 28. Fill in the missing no.**



**Q 29. Fill in the boxes-**



$$\square + \square = \square$$

$$\square \times \square = \square$$

**Q 30. 5 tens 8 ones – 2 tens 1 one =**

\_\_\_\_\_.



## **SUBJECT – EVS**

### **A. Multiple Choice Questions-**

**Q 31. Animals that live in forests and open land are called \_\_\_\_\_.**

- |                            |                         |
|----------------------------|-------------------------|
| <b>a) Domestic animals</b> | <b>b) Pet animals</b>   |
| <b>c) Wild animals</b>     | <b>d) None of these</b> |

**Q 32. A car needs \_\_\_\_\_ to run on road.**

- |                 |                        |
|-----------------|------------------------|
| <b>a) Water</b> | <b>b) fuel</b>         |
| <b>c) Air</b>   | <b>d) All of these</b> |

**Q 33. Who among the following is a family member?**

- |                     |                   |
|---------------------|-------------------|
| <b>a) Neighbour</b> | <b>b) Friend</b>  |
| <b>c) Sister</b>    | <b>d) Teacher</b> |

**Q 34. Which of the following are parts of the legs?**

- |                                    |                                       |
|------------------------------------|---------------------------------------|
| <b>a) Thigh, knee, ankle, feet</b> | <b>b) head, shoulder, elbow, hand</b> |
| <b>c) Neck, chest, waist, hip</b>  | <b>d) Palm, fingers, wrist, arms</b>  |

**Q 35. Given below is a list of living and non-living things.**

**Dog, Chair, Roseplant, Ball, fish, Table, Crow, Book.**

**How many are living things and how many are non-living things?**

- |   |
|---|
| <b>a) 3 living things and 5 non-living things</b> |
| <b>b) 4 living things and 4 non-living things</b> |
| <b>c) 5 living things and 3 non-living things</b> |
| <b>d) 2 living things and 6 non-living things</b> |

**Q 36. We are able to see things clearly during day time because of the \_\_\_\_\_.**

**a) moon**

**b) stars**

**c) sunlight**

**d) clouds**

**Q 37. We can \_\_\_\_\_ with our hands.**

**a) smell**

**b) taste**

**c) hold**

**d) hear**

**Q 38. \_\_\_\_\_ is an outdoor game.**

**a) Cricket**

**b) Ludo**

**c) Chess**

**d) Snake & Ladder**

**Q 39. We can eat tasty food items in \_\_\_\_\_.**

**a) Canteen**

**b) Dance Room**

**c) Class Room**

**d) School Office**

**Q 40. We keep our hands warm with \_\_\_\_\_ when it is cold.**

**a) Sweater**

**b) Paper**

**c) Socks**

**d) Mittens**

**B. Fill in the blanks-**

**Q 41. We use our legs and feet to \_\_\_\_\_.**

**Q 42. People living near our houses are our**

\_\_\_\_\_.

**Q 43. Dogs and Cats are kept as \_\_\_\_\_.**

**Q 44. In the \_\_\_\_\_ room, we learn to sing and play musical instruments.**

**Q 45. What time do we have lunch? (Morning/ Afternoon/ Evening)**

\_\_\_\_\_.

**Q 46. My mother cooks food in**

\_\_\_\_\_.

**Q 47. Plants give us \_\_\_\_\_ gas.**

**Q 48. Breathing \_\_\_\_\_ air is good for our health.**

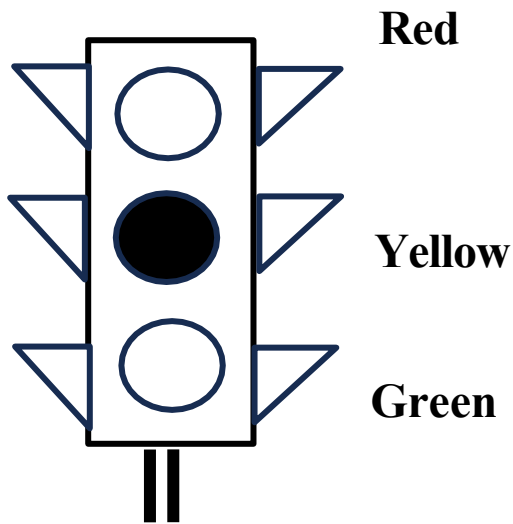
**Q 49. We should walk on the \_\_\_\_\_ side on the road.**

**Q 50. Some plants grow on land and some grow in**

\_\_\_\_\_.

**C. Each Question Carries one mark-**

**Q 51. We must follow traffic signals to be safe on the road. What does the middle light (Yellow) say?**



---

**Q 52. In which season do we wear Woolen clothes?**

---

**Q 53. Write the name of any two living things.**

---

**Q 54. What does Red light say?**

---

**Q 55. Which animal is called the king of jungle?**

**Q 56. What should we say when we ask for something?**

---

**Q 57. What are the two things that you need water for?**

---

**Q 58. What kind of house is made of ice?**

---

**Q 59. Which animal can see in the night?**

---

**Q 60. What do we use in rainy season?**

---