



NAME- _____ FATHER'S NAME- _____

ROLL NO.- _____ CLASS- 2nd

MOBILE NO.- _____ INVIGILATOR SIGN. - _____

TIME- 90 Min.

MM- 60

SUBJECT- MATHEMATICS

A. Multiple Choice Questions-

Q 1. Write the number if the places of digits are as follow: 7 at tens, 3 at ones and 1 at hundred.

a) 173

b) 137

c) 731

d) 713

Q 2. How many should be subtracted from 1000 to get 293?

a) 770

b) 707

c) 077

d) 700

Q 3. Which number is more than 50 but less than 100?

a) 30

b) 10

c) 75

d) None of these

Q 4. The clock is 10 minutes slow. If the clock is showing 11:30, what is the correct time?

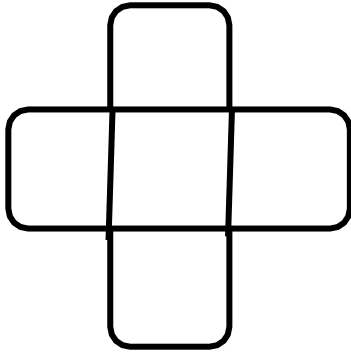
a) 11:20

b) 11:50

c) 11:30

d) None of these

Q 5. This solid is made up of 4 curved lines and one.



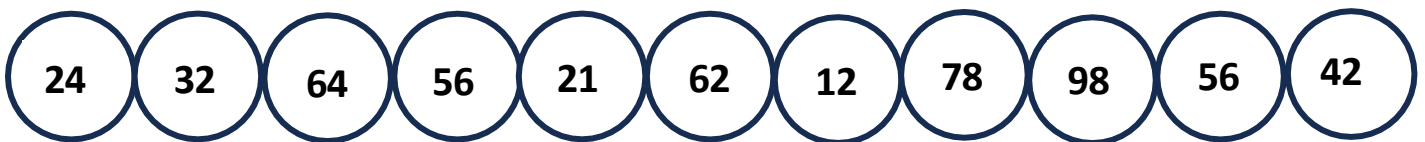
a) Quarter circle

b) Circle

c) Semi- circle

d) Square

Q 6. How many numbers given in the following series are divisible by 4?



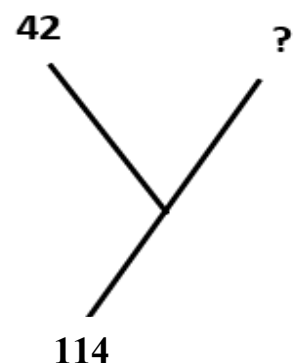
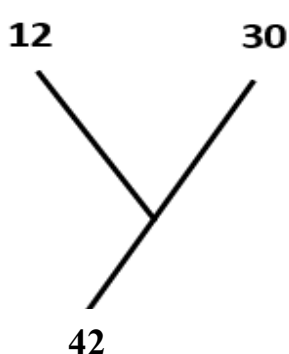
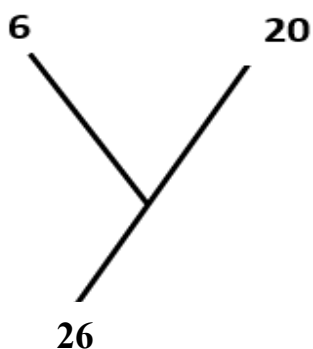
a) 5

b) 7

c) 9

d) 6

Q 7. Which one of the following option is correct to complete the series?



- a) 65
c) 52

- b) 62
d) 72

Q 8. If \triangle means '+' and ∇ means '-' then what comes at the place of question mark (?)?

$$111 \triangle 111 = 300 \nabla ?$$

- a) 87
c) 57

- b) 78
d) 75

Q 9. Pinky is 157 cm tall. Her younger sister Anjali is 12 cm shorter than her. Their father is 125 cm shorter than their total height. How tall is their father?

- a) 169 cm
c) 167 cm

- b) 137 cm
d) 177 cm

Q 10. Find the value of ,  and  respectively. (each shape stands for a digit)

$$\begin{array}{r}
 \text{heart} \\
 \text{crescent} \quad \text{crescent} \\
 + \quad \text{smiley} \quad \text{smiley} \quad \text{smiley} \\
 \hline
 9 \quad 4 \quad 3
 \end{array}$$

- a) 5, 1, 3

- b) 1, 3, 5

- c) 5, 4, 3

- d) 9, 4, 3

B. Fill in the blanks-

Q 11. Rs. _____ is 50 paise more than Rs. 1.70.

Q 12. The missing number in the sequence of 88, 96, 104,

_____.

Q 13. If the sum of two numbers is 11 and difference is 1, then numbers are _____, _____.

Q 14. 985 grams is _____grams less than 1 kg.

Q 15. If the minute hand is at 6 and hour hand is in between 10 and 11, then the time is _____.

Q 16. The day which starts with the letter 'M' is _____.

Q 17. Arhan saves Rs. 4 every day. He saves Rs. _____ on the 10th day.

Q 18. I am a _____with 6 flat faces, 12 sides and 8 corners.

Q 19. $670 + 220 = 980$ -

Q 20. 80 tens are _____hundreds.

C. Short Answer Type Questions-

Q 21. A shopkeeper has 317 books. If he sells 299 books on a particular day, how many books are left with him?

Q 22. Check your subtraction using addition.

T	O
7	4
4	9

-

+

T	O

Q 23. Complete the table

23	26			
			42	
43				
			62	
	66			75

Q 24. Shreya collected some pebbles month wise from January to July and recorded the data as below.

January	February	March	April	May	June	July
20	13	13	21	16	6	7

How many pebbles were collected from January to March?

Q 25. Write the name of a shape which has 2 flat faces, 1 curved face and 2 edges with 0 corners.

Q 26.

Number of items	Cost
Ball	Rs. 20
Book	Rs. 30
Pencil Box	Rs. 15


If Shyam has Rs. 35, what two things he can buy?

Q 27. There is a tank to be filled with 900 Litre of water. Each filled bucket can hold 10 Litre of water. How many buckets are needed to fill the tank.

Q 28. Find the product of given no.

1	5	2
X		9

Q 29. Draw the hands in clock with time 5:45.



Q 30. Rearrange and form the days of a week.

Unscrambled Letters	Correct Spelling of Day
HTRDYUSA	

SUBJECT- EVS

A. Multiple Choice Questions-

Q 31. What do we use our nose for besides smelling?

- a) Tasting
- b) Hearing
- c) Breathing
- d) Seeing

Q 32. Which one of the following is the topmost part of the body?

- a) Trunk
- b) Head
- c) Limbs
- d) Feet

Q 33. An _____ family includes parents, children, aunts and uncles?

- a) Nuclear
- c) extended

- b) immediate
- d) small

Q 34. Which of the following do not come from plants?

- a) Vegetables
- c) Honey

- b) Seeds
- d) Pulses

Q 35. Which of the animals can live both on land and in water?

- a) Rabbit
- c) Frog

- b) Cat
- d) Dog

Q 36. What should we say when we wake up and before we sleep?

- a) good evening
- b) good bye
- c) thankyou
- d) Wish “Good Morning” and “Good Night”

Q 37. Trees begin to shed pale leaves in

- a) Summer
- c) Autumn

- b) Winter
- d) Spring

Q 38. The sun is over our head in/ at _____.

- a) morning
- c) evening

- b) noon
- d) night

Q 39. A house that has more than one floor is called _____

- a) Caravan
- c) Bungalow

- b) Multistorey Building
- d) None of these

Q 40. A _____ is a large flat land.

- a) Desert
- c) Plain
- b) Hill
- d) Streams

B. Fill in the blanks-

Q 41. The sun sets in the

_____.

Q 42. A train runs on

_____.

Q 43. A _____ shows the days of the week and months of the year.

Q 44. The day to day change in the condition of the air of a place is called _____.

Q 45. Sunlight takes about _____ to reach the Earth.

Q 46. A desert is a land covered with _____.

Q 47. A handpump is used to take out water from the

_____.

Q 48. _____ is the only animal that can not jump.

Q 49. _____ of a plant absorb water from the soil.

Q 50. A _____ makes and repairs our furniture.

C. Short Answer Type Questions-

Q 51. Which direction is opposite to North?

Q 52. Write the fastest mode of transportation.

Q 53. How many planets are there in solar system?

Q 54. What is the fastest mode of communication to send a message?

Q 55. When do we celebrate Earth Day?

Q 56. Which part of a plant makes foods?

Q 57. Which number can we dial to call an Ambulance?

Q 58. What are dairy foods?

Q 59. You get me from the sea, but I am not a fish. I am essential for cooking, but I am not a dish.

Who am I?

Q 60. When do we celebrate Independence Day?
